



Determine which letter best represents the sum.

1) $\frac{8}{10} + \frac{4}{10}$

3) $\frac{5}{6} + \frac{5}{6}$

5) $\frac{3}{6} + \frac{1}{6}$

7) $\frac{1}{5} + \frac{1}{5}$

9) $\frac{2}{5} + \frac{4}{5}$

11) $\frac{1}{3} + \frac{1}{3}$

13) $\frac{2}{4} + \frac{3}{4}$

2) $\frac{2}{8} + \frac{1}{8}$

4) $\frac{8}{10} + \frac{6}{10}$

6) $\frac{1}{2} + \frac{1}{2}$

8) $\frac{1}{4} + \frac{2}{4}$

10) $\frac{1}{5} + \frac{4}{5}$

12) $\frac{4}{10} + \frac{4}{10}$

14) $\frac{3}{4} + \frac{3}{4}$

Answers

1. _____

2. _____

3. _____

4. _____

5. _____

6. _____

7. _____

8. _____

9. _____

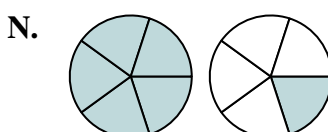
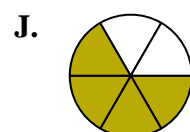
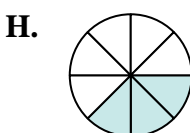
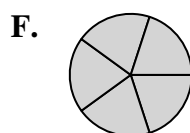
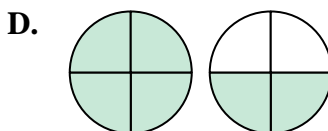
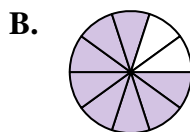
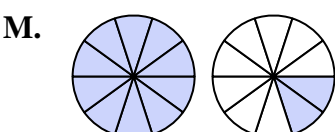
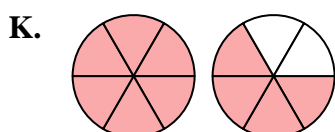
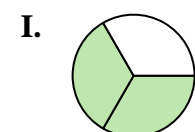
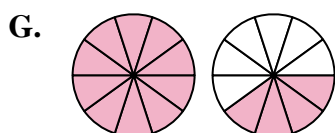
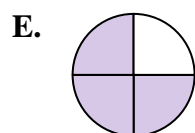
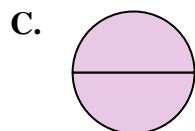
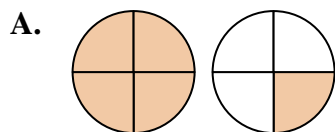
10. _____

11. _____

12. _____

13. _____

14. _____





Determine which letter best represents the sum.

1) $\frac{8}{10} + \frac{4}{10}$

3) $\frac{5}{6} + \frac{5}{6}$

5) $\frac{3}{6} + \frac{1}{6}$

7) $\frac{1}{5} + \frac{1}{5}$

9) $\frac{2}{5} + \frac{4}{5}$

11) $\frac{1}{3} + \frac{1}{3}$

13) $\frac{2}{4} + \frac{3}{4}$

2) $\frac{2}{8} + \frac{1}{8}$

4) $\frac{8}{10} + \frac{6}{10}$

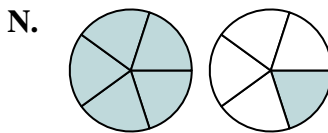
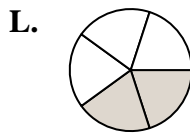
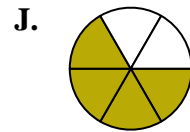
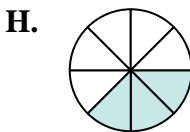
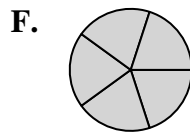
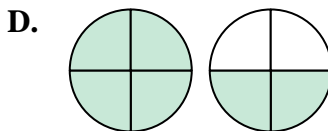
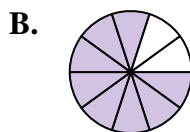
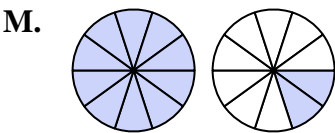
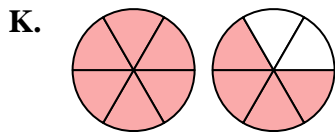
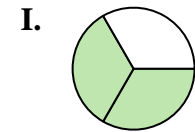
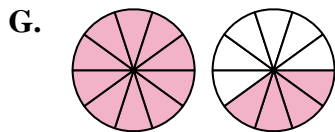
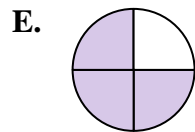
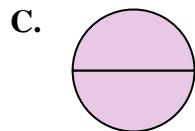
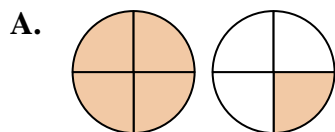
6) $\frac{1}{2} + \frac{1}{2}$

8) $\frac{1}{4} + \frac{2}{4}$

10) $\frac{1}{5} + \frac{4}{5}$

12) $\frac{4}{10} + \frac{4}{10}$

14) $\frac{3}{4} + \frac{3}{4}$



Answers

1. **M** $1\frac{2}{10}$

2. **H** $\frac{3}{8}$

3. **K** $1\frac{4}{6}$

4. **G** $1\frac{4}{10}$

5. **J** $\frac{4}{6}$

6. **C** $\frac{2}{2}$

7. **L** $\frac{2}{5}$

8. **E** $\frac{3}{4}$

9. **N** $1\frac{1}{5}$

10. **F** $\frac{5}{5}$

11. **I** $\frac{2}{3}$

12. **B** $\frac{8}{10}$

13. **A** $1\frac{1}{4}$

14. **D** $1\frac{2}{4}$